



1. Write the following numbers in words:

a. 11 - \_\_\_\_\_

b. 24 - \_\_\_\_\_

c. 39 - \_\_\_\_\_

d. 46 - \_\_\_\_\_

e. 53 - \_\_\_\_\_

2. Write the number that comes after :

a. 11 \_\_\_\_\_

b. 15 \_\_\_\_\_

c. 21 \_\_\_\_\_

d. 32 \_\_\_\_\_

e. 43 \_\_\_\_\_

3. Counting backwards:

a. 8, 7, \_\_\_\_\_, \_\_\_\_\_, \_\_\_\_\_, \_\_\_\_\_



b. 17, 16, \_\_\_\_\_, \_\_\_\_\_, \_\_\_\_\_, \_\_\_\_\_

c. 26, \_\_\_\_\_, \_\_\_\_\_, 23, \_\_\_\_\_, \_\_\_\_\_



d. 38, \_\_\_\_\_, 36, \_\_\_\_\_, \_\_\_\_\_, \_\_\_\_\_

e. 55, \_\_\_\_\_, \_\_\_\_\_, 52, \_\_\_\_\_, \_\_\_\_\_

4. Add the following objects and write the answer:

a.  +  = \_\_\_\_\_

b.  +  = \_\_\_\_\_

c.  +  = \_\_\_\_\_

d.  +  = \_\_\_\_\_

e.  +  = \_\_\_\_\_