



ST. LAWRENCE HIGH SCHOOL
A JESUIT CHRISTIAN MINORITY INSTITUTION
27, BALLYGUNGE CIRCULAR ROAD
Worksheet 2 (Answers)



Class: 1
Date: 08.04.2020

Sub: Arithmetic

1. Write the following numbers in words:

- a. 11 - Eleven
- b. 24 - Twenty- four
- c. 39 - Thirty- nine
- d. 46 - Forty- six
- e. 53- Fifty- three







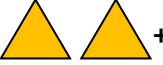



2. Write the number that comes after :

- a. 11 12
- b. 15 16
- c. 21 22
- d. 32 33
- e. 43 44

3. Counting backwards:

- a. 8, 7, 6, 5, 4, 3
- b. 17, 16, 15, 14, 13, 12
- c. 26, 25, 24, 23, 22, 21
- d. 38, 37, 36, 35, 34, 33
- e. 55, 54, 53, 52, 51, 50,

4. Add the following objects and write the answer:

- a.  +  = 7
- b.  +  = 6
- c.  +  = 6
- d.  +  = 5
- e.  +  = 8

Mr. Samuel Newton