



# ST. LAWRENCE HIGH SCHOOL

A JESUIT CHRISTIAN MINORITY INSTITUTION

First Term Examination - 2018

Class : 8



SUB : Geography

F.M.: 80

DURATION: 2 Hrs30Mins

DATE: 25.04.2018

## Group A

1. Choose the correct option: 1x5=5
  - a. The steepness of slope is called contour/ relief/ gradient/ cliff.
  - b. Dispersed settlements are usually found in foothills/ summit/ cliff/ rapids.
  - c. An area drained by a single river is called cascade/ catchment/ waterfall/ meander basin.
  - d. The people in the age group of 15 to 60/ 15 to 65/ 20 to 60/ 15 to 55 are categorized as working population.
  - e. Busuanga/ Ryukyu/ Maldives/ Kuril islands belong to Philippines.
  
2. Fill in the blanks: 1x3=3
  - a. \_\_\_\_\_ is known as the roof of the world.
  - b. The Mesopotamian Basin lies between the \_\_\_\_\_ and the \_\_\_\_\_ rivers.
  
3. Write true or false: 1x3=3
  - a. The number of females per thousand males is called sex ratio.
  - b. The Mongolian plain is surrounded by the Tien Shah and the Alai mountains.
  - c. The Census of India began in the year 1872.
  
4. Answer in one word: 1x2=2
  - a. What is the difference between natality and mortality known as?
  - b. What is the rectangular drainage pattern that develops in areas having hard and soft rocks is called?
  
5. Match the column( one is extra): 1x2=2

A	B
a. East Asia	i. Brunei
b. Southeast Asia	ii. Taiwan
	iii. Cyprus

## Group B

6. Answer the following: 2x5=10
  - a. In the given map no 45 D/7, what are the main occupations of the people in this region?
  - b. Where is the forest areas located in the map no. 45D/7?
  - c. What is Bench Mark?
  - d. What is Census?
  - e. State the latitudinal and longitudinal extent of Asia.
  
7. Answer any five: 3x5=15
  - a. Write about the rivers of southeast Asia.

- b. What is migration?
- c. Write a short note on plateau with a diagram and an example.
- d. What inference can we draw from highlands about the land use pattern?
- e. Discuss the relief noted in the sample map no 45 D/7.
- f. Why the Northern Lowlands of Asia are flood-prone?
- g. What is topographical map?

Group C

8. Answer any seven:

5x7=35


- a. Discuss with diagrams three distinct drainage patterns.
- b. Differentiate between temporary and permanent settlements.
- c. Differentiate between a mountain and a conical hill with diagrams and examples.
- d. What is contour interval? What is V.I. and H.E.? Explain with a diagram.
- e. What is over-population? What is optimum population? Mention any three problems of over-population.
- f. How do the topography, climate and water influence the distribution of population?
- g. Write about the mountain ranges and intermontane plateaus lying east and north of Pamir Knot.
- h. What is population composition? Explain about it on the heads of Age composition and composition of Working Population.
- i. Write about the islands of Asia from northeast to southeast.

9. Point out the following with proper symbols and index in the given map of Asia. NAMES MUST BE WRITTEN ON THE MAP ITSELF:

1x5=5

- a. Pontic range
- b. Lake Baikal
- c. River Indus
- d. Strait of Malacca
- e. Deccan Plateau





**Asia**



# ST. LAWRENCE HIGH SCHOOL

## First Term Test - 2018

Sub: Geography Class: 8 F. M. 80

Duration: 3 Hr

Date: 25/04/18

### Group A

1. Choose the correct option:

1x5=5

- a. gradient
- b. foothills.
- c. catchment
- d. 15 to 65
- e. Busuanga

2. Fill in the blanks:

1x3=3

- a. Tibet plateau
- b. Tigris, Euphrates

3. Write true or false:

1x3=3

- a. True
- b. False
- c. True

4. Answer in one word:

1x2=2

- a. Growth rate
- b. Trellised

5. Match the column( one is extra):

1x2=2

A	B
a. East Asia	Taiwan
b. Southeast Asia	Brunei

### Group B

6. Answer the following:

2x5=10

- a. Ch- 2, pg- 29, ans 7
- b. Ch-2, pg- 29, ans- 6
- c. Ch-1, pg- 10, Benchmark
- d. Ch- 3, og- 43, Census- First 4 lines
- e. Latitudes between 10°S and 80°N, longitude 25°E to 170°W

7. Answer any five:

3x5=15

- a. Ch- 11, pg- 110, Great River Basin- 3<sup>rd</sup> para
- b. Ch- 3, pg- 42, Migration
- c. Ch- 1, pg- 13
- d. Ch- 2, pg- 24, highlands & inferences
- e. Ch- 2, pg- 27, Relief

- f. Three rivers rises in mountains in south and drain in the north- Arctic Ocean. Mouths freezes, autumn comes early, spring late, thaws, but river flows, water gets blocked- causes flood twice.
- g. Ch- 1, pg- 8, Topographical maps

Group C

8. Answer any seven:

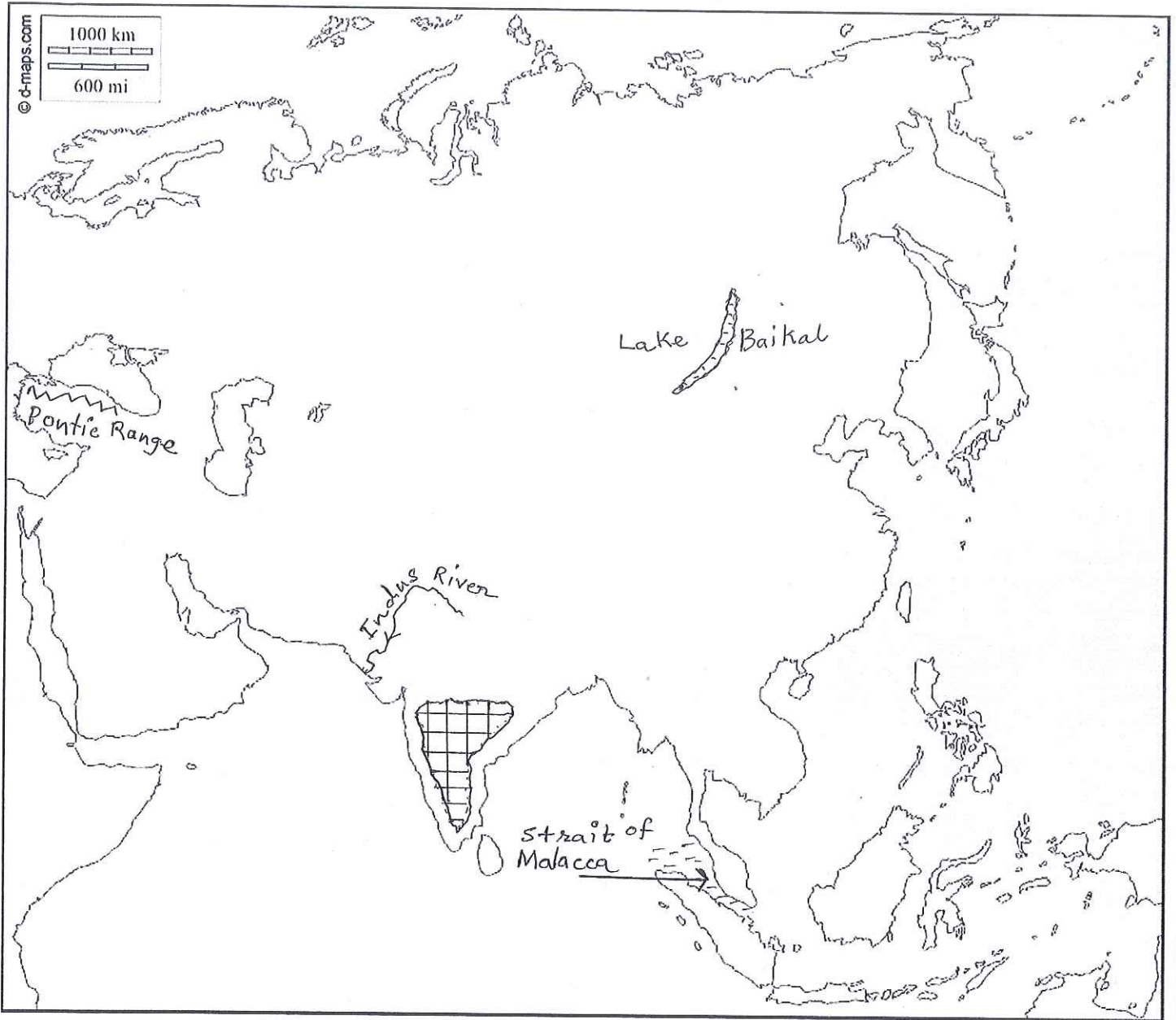
5x7=35

- a. Ch- 2, pg- 23, 3 Drainage Patterns
  - b. Ch- 1, pg- 16
  - c. Ch- 1, pg- 13
  - d. Ch- 1, pg- 10, Contour Interval (whole para)
  - e. Ch- 3, pg- 40 & 41, Last 3 lines 2<sup>nd</sup> para. Any three problems of overpopulation
  - f. Ch- 3, pg- 38 & 39
  - g. Ch- 11, pg- 109 "To the east ... Karakoram range"
  - h. Ch- 3, pg- 52, population composition, Age composition, Composition of Working population
  - i. Ch- 11, pg- 111, the Islands
9. Point out the following with proper symbols and index in the given map of Asia. NAMES MUST BE WRITTEN ON THE MAP ITSELF:





1x5=5

- a. Pontic range
- b. Lake Baikal
- c. River Indus
- d. Strait of Malacca
- e. Deccan Plateau





Index

-  Mountain Range
-  River
-  Water body
-  Plateau