



# ST. LAWRENCE HIGH SCHOOL

A JESUIT CHRISTIAN MINORITY INSTITUTION

27, BALLYGUNGE CIRCULAR ROAD



Sub: Arithmetic



Worksheet 15



Class: I



Topic: Subtraction & Mental Maths



Date: 23.04.2020



1. Tick ( ✓ ) the box which has less objects. How many less? (1. a) is done for you.



a.    
 2       3   
 $3 - 2 = 1$  less

b.    
 1       4   
 \_\_\_ - \_\_\_ = \_\_\_ less

c.    
 3       5   
 \_\_\_ - \_\_\_ = \_\_\_ less

d.    
 5       6   
 \_\_\_ - \_\_\_ = \_\_\_ less

e.    
 4       2   
 \_\_\_ - \_\_\_ = \_\_\_ less

f.    
 7       3   
 \_\_\_ - \_\_\_ = \_\_\_ less

2. Write the number just before or after:

- a. \_\_\_ 35
- b. \_\_\_ 100
- c. 241 \_\_\_
- d. \_\_\_ 186
- e. 249 \_\_\_

3. Write the number in between:

- a. 156 \_\_\_\_\_ 158
- b. 208 \_\_\_\_\_ 210
- c. 77 \_\_\_\_\_ 79
- d. 239 \_\_\_\_\_ 241
- e. 126 \_\_\_\_\_ 128

4. Fill in the blanks:

- a. 1 less than 8 is \_\_\_\_\_
- b. 1 less than 60 is \_\_\_\_\_
- c. 1 less than 26 is \_\_\_\_\_
- d. 1 less than 41 is \_\_\_\_\_
- e. 1 less than 2 is \_\_\_\_\_