



## Shape - RECTANGLE


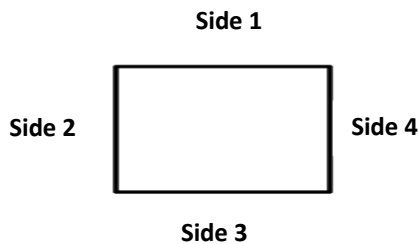


I am a Rectangle .

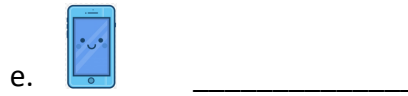


I have 4 sides made of 4 straight lines .

I have 4 corners.

I have 2 sides longer and 2 sides shorter.



1. Write the name of the following objects that match the shape of a Rectangle.



2. Subtract one and write the answer:

a.  $8 - 1 = \underline{\quad}$

b.  $26 - 1 = \underline{\quad}$

c.  $101 - 1 = \underline{\quad}$

d.  $240 - 1 = \underline{\quad}$

e.  $215 - 1 = \underline{\quad}$

3. Add one or Subtract one and write the answer:

a.  $46 + 1 = \underline{\quad}$

b.  $200 - 1 = \underline{\quad}$

c.  $150 + 1 = \underline{\quad}$

d.  $78 - 1 = \underline{\quad}$

e.  $225 + 1 = \underline{\quad}$

4. Fill in the blanks:

a.  $142 \underline{\quad}$

b.  $\underline{\quad} 58$

c.  $70 \underline{\quad} 72$

d.  $\underline{\quad} 218 \underline{\quad}$

e.  $126 \underline{\quad}$