



ST. LAWRENCE HIGH SCHOOL

A JESUIT CHRISTIAN MINORITY INSTITUTION

27, BALLYGUNGE CIRCULAR ROAD, KOLKATA- 700019



CLASS – III TERM – 2ND ARITHMETIC WORKSHEET – 2 DATE – 05.05.2020

FRACTIONS

I. Write following fractions as numbers.

1) Five-tenths = _____

2) Two-elevenths = _____

3) Seven-eighths = _____

4) Two-fourths = _____

5) Four-fifths = _____

II. Write the following fractions in words.

1) $\frac{2}{8}$ = _____

2) $\frac{5}{9}$ = _____

3) $\frac{6}{8}$ = _____

4) $\frac{7}{9}$ = _____

5) $\frac{3}{8}$ = _____

III. Complete the following. (Follow the example)

Example: $\frac{1}{3}$ of 9 = $9 \div 3 = 3$

1) $\frac{1}{2}$ of 60 = _____

2) $\frac{1}{4}$ of 28 = _____


3) $\frac{1}{3}$ of 33 = _____

4) $\frac{1}{5}$ of 45 = _____

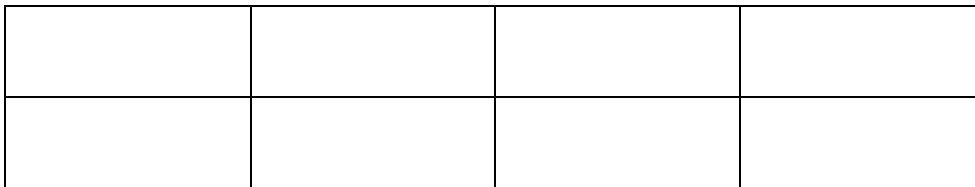
5) $\frac{1}{6}$ of 36 = _____

IV. Colour to show the fractions.

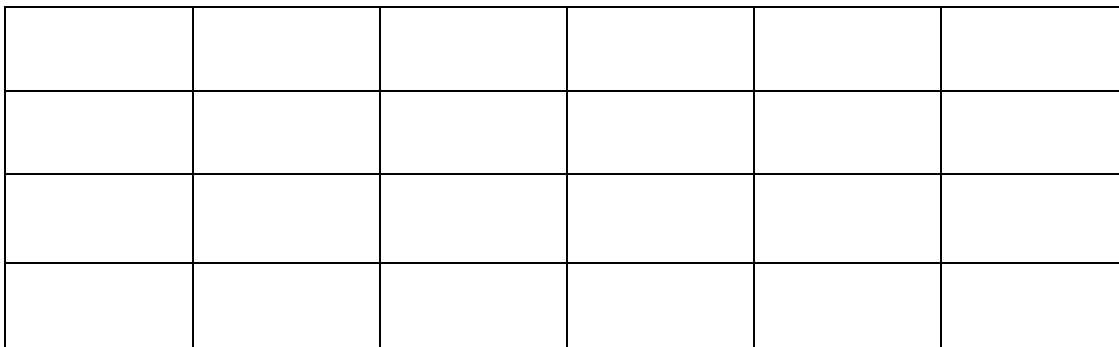
1) $\frac{5}{6}$




2) $\frac{6}{8}$



3) $\frac{20}{24}$



4) $\frac{2}{4}$



5) $\frac{7}{9}$
