



ST. LAWRENCE HIGH SCHOOL

A JESUIT CHRISTIAN MINORITY INSTITUTION

27, BALLYGUNGE CIRCULAR ROAD

2ND TERM - 2020

WORKSHEET 8

TOPIC: SUBTRACTION UPTO 20 AND WRITE IN WORDS

CLASS: 1

SUB: ARITHMETIC

DATE: 12.05.2020

1. Write the following numbers in words:

HTO

a) 286 - _____



b) 287 - _____

c) 288 - _____



d) 289 - _____

e) 290 - _____



2. Subtract the following objects. (2a) is done for you:

a)  18 -  4 = 14
1 ten + 4 Ones



T	O
1	8
-	<u>4</u>
<u>1</u>	<u>4</u>

b)  12 -  1 = _____
1 ten + _____ Ones



T	O
1	2
-	<u>1</u>
_____	_____

c)  17 -  5 = _____
1 ten + _____ Ones



T	O
1	7
-	<u>5</u>
_____	_____

d)  19 -  4 = _____
1 ten + _____ Ones

T	O
1	9
-	<u>4</u>
_____	_____

e)  16 -  3 = _____
1 ten + _____ Ones

T	O
1	6
-	<u>3</u>
_____	_____

f)  20 -  4 = _____
1 ten + _____ Ones

T	O
2	0
-	<u>4</u>
_____	_____



3. Fill in the blanks:

- a) $5 - 1 = \underline{\quad}$ b) $10 - 1 = \underline{\quad}$ c) $15 - 1 = \underline{\quad}$
 d) $19 - 1 = \underline{\quad}$ e) $20 - 1 = \underline{\quad}$



4. Subtract and write the answer: (4a) is done for you.

a) There are 14 birds  .
 2 birds  sat on a tree.
 How many birds are left? 12



T	O
1	4
-	<u>2</u>
1	<u>2</u>

b) There are 10 sweets  .
 Jeet ate 4 sweets  .
 How many sweets are left?




T	O
1	0
-	<u>4</u>
	<u> </u>

c) 15 pencils  .
 Navin lost 3 pencils  .
 How many pencils are left?

T	O
1	5
-	<u>3</u>
	<u> </u>

d) 17 flowers  .
 Ali plucked 6 flowers  .
 How many flowers are left?

T	O
1	7
-	<u>6</u>
	<u> </u>

e) There are 18 mangoes  .
 . 4 mangoes  fell
 on the ground. How many mangoes are left?

T	O
1	8
-	<u>4</u>
	<u> </u>