



ST. LAWRENCE HIGH SCHOOL

A JESUIT CHRISTIAN MINORITY INSTITUTION

27, BALLYGUNGE CIRCULAR ROAD, KOLKATA - 19



Worksheet 11

Class: 1

Sub: Arithmetic

Topic: Subtraction & Write in words

Date: 18.04.2020

1. Write the following numbers in words:

HTO

a. 236 - Two hundred and thirty six

b. 237 - _____

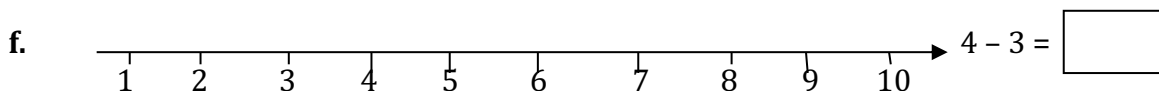
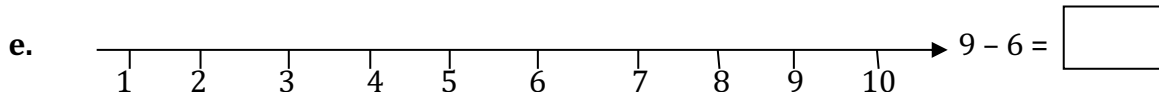
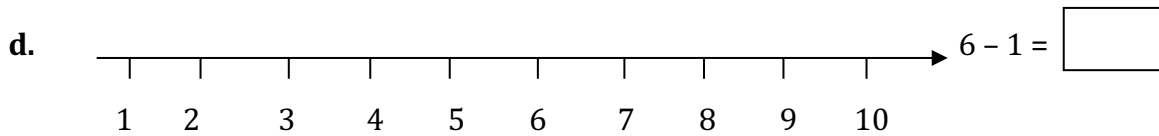
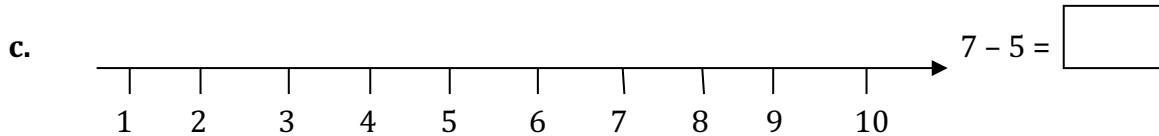
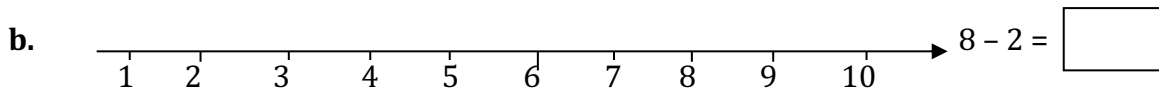
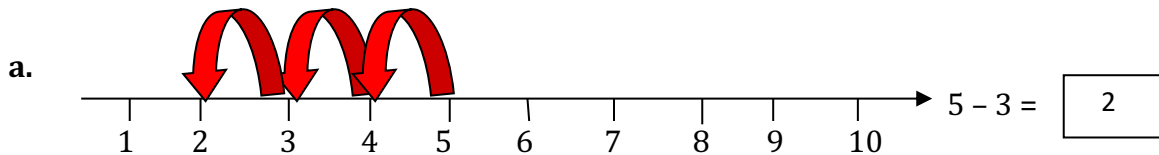
c. 238 - _____

d. 239 - _____

e. 240 - _____

f. 241 - _____

2. Subtract using the number line. Write the answer in the box



3. Subtract the following.

a. $3 - 2 = \underline{\quad}$

b. $5 - 1 = \underline{\quad}$

c. $7 - 4 = \underline{\quad}$

d. $8 - 6 = \underline{\quad}$

e. $9 - 1 = \underline{\quad}$

4. Subtract and write your answer.

a.
$$\begin{array}{r} 4 \\ - 4 \\ \hline \end{array}$$

b.
$$\begin{array}{r} 9 \\ - 5 \\ \hline \end{array}$$

c.
$$\begin{array}{r} 8 \\ - 3 \\ \hline \end{array}$$

d.
$$\begin{array}{r} 7 \\ - 1 \\ \hline \end{array}$$

e.
$$\begin{array}{r} 6 \\ - 6 \\ \hline \end{array}$$

Mr. Samuel Newton