



ST. LAWRENCE HIGH SCHOOL
A JESUIT CHRISTIAN MINORITY INSTITUTION
27, BALLYGUNGE CIRCULAR ROAD. KOLKATA -700019
Worksheet Number- 25



Subject : Arithmetic

Second Term

Class: II

Date: 20-06 -2020

Topic : Shapes and Patterns & Mental Maths

I. **Underline the correct option:**

1) Which plane figure, has its opposite sides equal? _____

- a) Triangle
- b) Circle
- c) Rectangle

2) The shape of an egg is _____

- a) triangular
- b) circular
- c) oval

3) A figure with no vertices is a _____

- a) triangle
- b) circle
- c) rectangle

4) The shape of a bangle is _____


- a) triangular
- b) circular
- c) oval

5) Straight lines are of _____ kinds.



- a) two
- b) three
- c) four

II. Match the following objects with their corresponding shapes.
Write the names of the shapes below the image of the shapes.


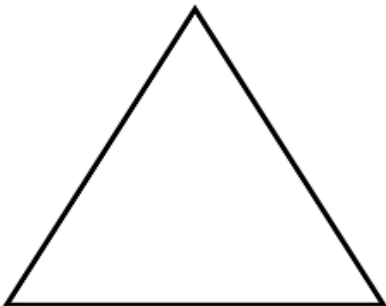
1)




2)



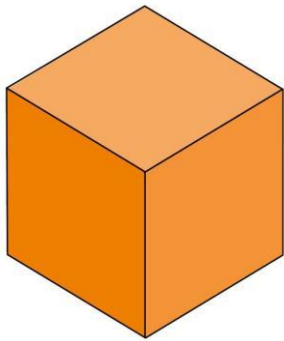
3)



4)



5)



III. Do as directed.

1. What is the value of 8 times 5? _____
2. One less than 60 is _____
3. $108 + 6 =$ _____ tens + _____ ones
4. How many are 7 sets of 2? _____
5. $5 \times 4 = 20 +$ _____
6. $188 + \underline{\quad} = 190$
7. Add four 2s to six 2s. _____
8. $18 - (3 + 8) =$ _____
9. 1 less than 800 is _____
10. 24 shoes = _____ pairs

Ms. Donna Kanikam

