



# ST. LAWRENCE HIGH SCHOOL

A JESUIT CHRISTIAN MINORITY INSTITUTION

27, BALLYGUNGE CIRCULAR ROAD



Sub: Arithmetic



Answer Worksheet 14

Class: I

Topic: Subtraction & Mental Maths

Date: 22.04.2020



1. Tick ( ✓ ) the box which has more objects. How many more? (1. a) is done for you.

a.    
 2       4



4 - 2 = 2 more

b.    
 1       3

3 - 1 = 2 more

c.    
 5       2

5 - 2 = 3 more

d.    
 3       2

3 - 2 = 1 more

e.    
 6       4

6 - 4 = 2 more

f.    
 8       4

8 - 4 = 4 more

2. Write the number just before or after:

- a. 5 6
- b. 8 9
- c. 25 26
- d. 41 42
- e. 69 70

3. Write the number in between:

- a. 48 49 50
- b. 52 53 54
- c. 87 88 89
- d. 61 62 63
- e. 24 25 26

4. Fill in the blanks:

- a. 1 more than 16 is 17
- b. 1 more than 21 is 22
- c. 1 more than 59 is 60
- d. 1 more than 86 is 87
- e. 1 more than 40 is 41

