




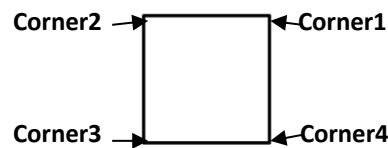
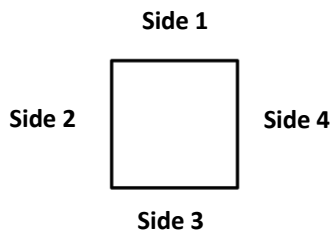
## Shape - SQUARE




I am a Square .

I have 4 equal sides made of 4 straight lines .

I have 4 corners.



1. Write the name of the following objects that match the shape of a Square.

- a.  Biscuit    b.  Clock    c.  Carrom Board
- d.  Ludo    e.  Table

2. Write the number just before and after:

- a. 14    15    16
- b. 98    99    100
- c. 69    70    71
- d. 150    151    152
- e. 244    245    246

3. Add one and write the answer:

- a.  $16 + 1 = \underline{17}$
- b.  $47 + 1 = \underline{48}$
- c.  $199 + 1 = \underline{200}$
- d.  $206 + 1 = \underline{207}$
- e.  $51 + 1 = \underline{52}$

4. Fill in the blanks:

- a. 1 more than 184 is 185
- b. 1 less than 230 is 229
- c. 1 less than 152 is 151
- d. 1 more than 119 is 120
- e. 1 more than 207 is 208