

Subject :Arithmetic

Second Term

Class: II

Date: 01-07 -2020

MONEY


We need money to buy things. 100 paise make 1 rupee.

I. Count and write the amount.

1)



2)




3)




4)



5)



6)



7)



8)



9)



10)



III. Subtract.

1)

$$\begin{array}{r} \text{Rs.} \qquad \qquad \qquad \text{P} \\ 6 \quad 9 \qquad \qquad \qquad 0 \quad 0 \\ - 2 \quad 5 \qquad \qquad \qquad 0 \quad 0 \\ \hline \end{array}$$

Answer: _____

2)

$$\begin{array}{r} \text{Rs.} \qquad \qquad \qquad \text{P} \\ 7 \quad 8 \qquad \qquad \qquad 5 \quad 0 \\ - 2 \quad 4 \qquad \qquad \qquad 0 \quad 0 \\ \hline \end{array}$$

Answer: _____

3)

$$\begin{array}{r} \text{Rs.} \qquad \qquad \qquad \text{P} \\ 7 \quad 6 \qquad \qquad \qquad 0 \quad 0 \\ - 4 \quad 2 \qquad \qquad \qquad 0 \quad 0 \\ \hline \end{array}$$

Answer: _____

4)

$$\begin{array}{r} \text{Rs.} \qquad \qquad \qquad \text{P} \\ 5 \quad 6 \qquad \qquad \qquad 5 \quad 0 \\ - 4 \quad 3 \qquad \qquad \qquad 5 \quad 0 \\ \hline \end{array}$$

Answer: _____

IV. Read and solve.

- 1) Kreesha bought a bag for Rs 210 and a Make-Up kit for Rs .730 . How much did she spend in all?
 - 2) Ayushman had Rs. 500. He bought a camera for Rs. 250. How much money does he have left ?
-

Ms. Donna Kanikam.