




ST. LAWRENCE HIGH SCHOOL
A JESUIT CHRISTIAN MINORITY INSTITUTION
27, BALLYGUNGE CIRCULAR ROAD. KOLKATA -700019
Worksheet Number- 27



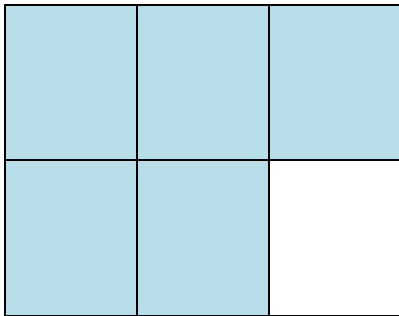
Subject :Arithmetic Second Term Topic FRACTIONS Class: II Date: 24-06 -2020

I. Express the shaded part as fractions.

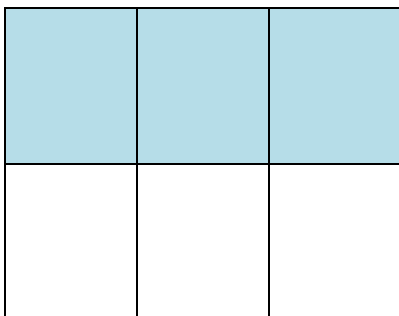
1)



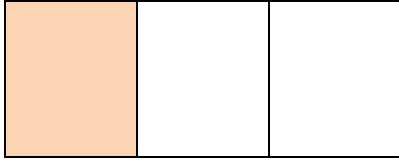
2)




3)



4)



5)



II. Write following fractions as numbers.

1) Five-tenths =

2) Two-elevenths =

3) Seven-eighths =

4) Two-fourths =

5) Four-fifths =

III. Write the following fractions in words.

1) $\frac{2}{8} =$

2) $\frac{5}{9} =$


3) $\frac{6}{8} =$

4) $\frac{7}{9} =$


5) $\frac{3}{8} =$

IV. Colour to show the fractions.

1) $\frac{5}{6}$



2) $\frac{6}{8}$



3) $\frac{20}{24}$

4) $\frac{2}{4}$

5) $\frac{7}{9}$

