



ST. LAWRENCE HIGH SCHOOL

A JESUIT CHRISTIAN MINORITY INSTITUTION

27, BALLYGUNGE CIRCULAR ROAD, KOLKATA- 700019



CLASS – III TERM – 2ND ARITHMETIC ANSWER: WORKSHEET – 25 DATE – 20.06.2020

TIME

I. Fill in the blanks.

- 1) There are 60 seconds in a minute.
- 2) There are 60 minutes in an hour.
- 3) There are 12 hours on the clock.


II. Write the time shown in the figures below.

1)




Answer: - 4: 00 or 4 o'clock

2)




Answer: - 5: 00 or 5 o'clock

3)



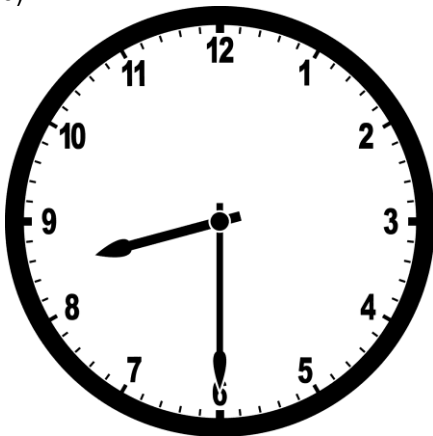
Answer: - 6: 00 or 6 o'clock

4)




Answer: - 7: 10 or 10 minutes past 7

5)



Answer: - 8: 30 or 30 minutes past 8 or half past 8

6)



Answer: - 9: 15 or 15 minutes past 9 or quarter past 9

7)



Answer: - 3: 15 or 15 minutes past 3 or quarter past 3

8)



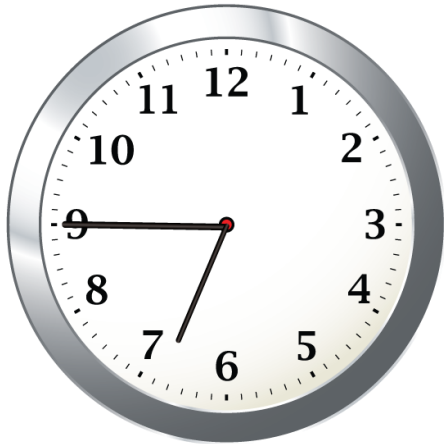
Answer: - 4: 50 or 10 minutes to 5

9)



Answer: - 11: 55 or 5 minutes to 12


10)



Answer: - 6: 45 or 15 minutes to 7 or quarter to 7


III. Draw the hands on the clocks to indicate the time given below each clock.

1)




TIME: - 8: 55

2)




TIME: - 6: 30

3)




TIME: - 7: 25

4)




TIME: - 9: 20

5)




TIME: - 5: 15

6)



TIME: - 3: 20

7)



TIME: - 8: 10