



# ST. LAWRENCE HIGH SCHOOL

A JESUIT CHRISTIAN MINORITY INSTITUTION

27, BALLYGUNGE CIRCULAR ROAD

2ND TERM - 2020

WORKSHEET 9

TOPIC: ADDITION AND SUBTRACTION UPTO 20 & WRITE IN WORDS

CLASS: 1

SUB: ARITHMETIC

DATE: 13.05.2020

1. Write the following numbers in words:

HTO

a) 291 - \_\_\_\_\_

b) 292 - \_\_\_\_\_

c) 293 - \_\_\_\_\_

d) 294 - \_\_\_\_\_

e) 295 - \_\_\_\_\_

2. Add or subtract and write the answer:

a)  $18 + 2 = \underline{\quad}$

b)  $14 + 3 = \underline{\quad}$

c)  $19 - 5 = \underline{\quad}$



d)  $16 - 4 = \underline{\quad}$



e)  $15 + 3 = \underline{\quad}$



3. Count and write the answer:

a)  +  = \_\_\_\_\_

b)  +  = \_\_\_\_\_

c)  -  = \_\_\_\_\_

d)  -  = \_\_\_\_\_

e)  +  = \_\_\_\_\_

4. Add or subtract and write the answer:

a)  $\begin{array}{r} T \quad O \\ 7 \\ + \quad 8 \\ \hline \end{array}$

Answer \_\_\_\_\_

b)  $\begin{array}{r} T \quad O \\ 9 \\ + \quad 3 \\ \hline \end{array}$

Answer \_\_\_\_\_

c)  $\begin{array}{r} T \quad O \\ 1 \quad 5 \\ - \quad 2 \\ \hline \end{array}$

Answer \_\_\_\_\_

d)  $\begin{array}{r} T \quad O \\ 6 \\ + \quad 8 \\ \hline \end{array}$

Answer \_\_\_\_\_

e)  $\begin{array}{r} T \quad O \\ 1 \quad 9 \\ - \quad 8 \\ \hline \end{array}$

Answer \_\_\_\_\_

Ms. Lucy K. Gomes