



ST. LAWRENCE HIGH SCHOOL

A JESUIT CHRISTIAN MINORITY INSTITUTION

27, BALLYGUNGE CIRCULAR ROAD



Sub: Arithmetic



Worksheet 14

Class: I

Topic: Subtraction & Mental Maths

Date: 22.04.2020



1. Tick (✓) the box which has more objects. How many more? (1. a) is done for you.

a.  
 2 4



$4 - 2 = 2$ more

b.  
 1 3

___ - ___ = ___ more

c.  
 5 2

___ - ___ = ___ more

d.  
 3 2

___ - ___ = ___ more

e.  
 6 4

___ - ___ = ___ more

f.  
 8 4

___ - ___ = ___ more

2. Write the number just before or after:

- a. 5 _____
- b. 8 _____
- c. _____ 26
- d. _____ 42
- e. 69 _____

3. Write the number in between:

- a. 48 _____ 50
- b. 52 _____ 54
- c. 87 _____ 89
- d. 61 _____ 63
- e. 24 _____ 26

4. Fill in the blanks:

- a. 1 more than 16 is _____
- b. 1 more than 21 is _____
- c. 1 more than 59 is _____
- d. 1 more than 86 is _____
- e. 1 more than 40 is _____