



ST. LAWRENCE HIGH SCHOOL

A JESUIT CHRISTIAN MINORITY INSTITUTION

27, BALLYGUNGE CIRCULAR ROAD

2ND TERM - 2020

ANSWER WORKSHEET 13

TOPIC: ADDITION AND SUBTRACTION UPTO 20 & WRITE IN WORDS



SUB: ARITHMETIC

CLASS: 1

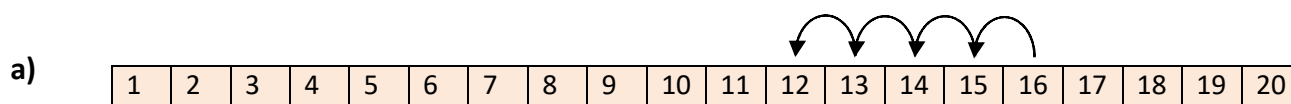
DATE: 8.06.2020

1. Write the following numbers in words:

HTO


- a) 301 - Three hundred and one.
- b) 302 - Three hundred and two.
- c) 303 - Three hundred and three.
- d) 304 - Three hundred and four.
- e) 305 - Three hundred and five.

2. Count back to subtract using the number strip. (2a) is done for you:

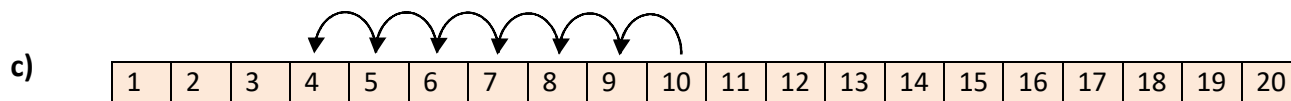


Start at 16. Count back 4 boxes. The answer is 12

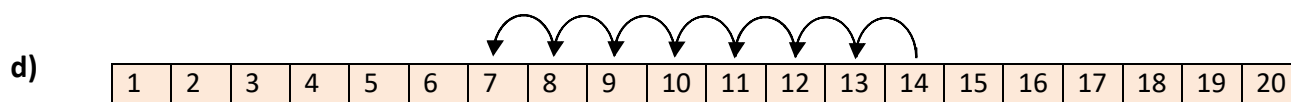
$$16 - 4 = \underline{12}$$



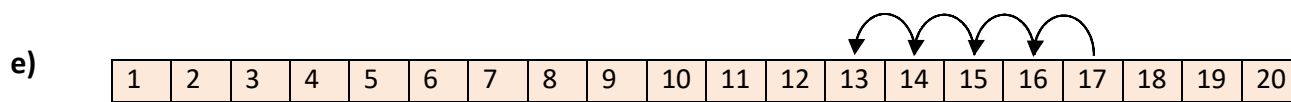
$$18 - 3 = \underline{15}$$



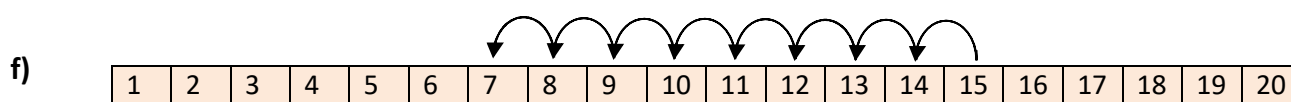
$$10 - 6 = \underline{4}$$



$$14 - 7 = \underline{7}$$



$$17 - 4 = \underline{13}$$



$$15 - 8 = \underline{7}$$

3. Cross (x) out the wrong sum. Solve the correct sum. (3a) is done for you:

a) There are 8 books on the table.
$$\begin{array}{r} T \quad O \\ 8 \\ + \quad 7 \\ \hline \end{array}$$
 Anuj keeps 7 more books on the table.
$$\begin{array}{r} T \quad O \\ 8 \\ - \quad 7 \\ \hline \end{array}$$
 How many books are there in all?
$$\text{Answer } \underline{\mathbf{15}}$$

$$\text{Answer } \underline{\mathbf{X}}$$

b) There are 9 mangoes in the basket.
$$\begin{array}{r} T \quad O \\ 9 \\ + \quad 5 \\ \hline \end{array}$$
 Piyush kept 5 more mangoes in the basket.
$$\begin{array}{r} T \quad O \\ 9 \\ - \quad 5 \\ \hline \end{array}$$
 How many mangoes are there in all?
$$\text{Answer } \underline{\mathbf{14}}$$

$$\text{Answer } \underline{\mathbf{X}}$$

c) There are 12 red roses and 5 pink roses in a flower vase.
$$\begin{array}{r} T \quad O \\ 1 \quad 2 \\ - \quad 5 \\ \hline \end{array}$$
 How many roses are there in all?
$$\begin{array}{r} T \quad O \\ 1 \quad 2 \\ + \quad 5 \\ \hline \end{array}$$

$$\text{Answer } \underline{\mathbf{X}}$$

$$\text{Answer } \underline{\mathbf{17}}$$

d) There are 10 sweets on a plate.
$$\begin{array}{r} T \quad O \\ 1 \quad 0 \\ + \quad 8 \\ \hline \end{array}$$
 Mummy bought 8 more sweets.
$$\begin{array}{r} T \quad O \\ 1 \quad 0 \\ - \quad 8 \\ \hline \end{array}$$
 How many sweets are there in all?
$$\text{Answer } \underline{\mathbf{18}}$$

$$\text{Answer } \underline{\mathbf{X}}$$

e) Papa bought 8 balloons.
$$\begin{array}{r} T \quad O \\ 8 \\ + \quad 4 \\ \hline \end{array}$$
 Uncle bought 4 more balloons.
$$\begin{array}{r} T \quad O \\ 8 \\ - \quad 4 \\ \hline \end{array}$$
 How many balloons are there in all?
$$\text{Answer } \underline{\mathbf{12}}$$

$$\text{Answer } \underline{\mathbf{X}}$$

f) There are 9 houses on one side of the road.
$$\begin{array}{r} T \quad O \\ 9 \\ - \quad 7 \\ \hline \end{array}$$
 There are 7 more houses on the other side of the road.
$$\begin{array}{r} T \quad O \\ 9 \\ + \quad 7 \\ \hline \end{array}$$
 How many houses are there in all?
$$\text{Answer } \underline{\mathbf{X}}$$

$$\text{Answer } \underline{\mathbf{16}}$$

4. Write the correct answer:

a) 10 erasers and 4 erasers are lost. How many erasers are left?
$$10 - 4 = \underline{\mathbf{6}}$$

b) 18 people are in a bus. 2 people got off the bus. How many people are left in the bus?
$$18 - 2 = \underline{\mathbf{16}}$$

c) 15 cakes are in a shop. 7 cakes are sold. How many cakes are left?
$$15 - 7 = \underline{\mathbf{8}}$$

d) Papa bought 20 oranges. Binny ate 5 oranges. How many oranges are left?
$$20 - 5 = \underline{\mathbf{15}}$$

e) 16 birds are sitting on the tree branch. 6 birds flew away. How many birds are left?
$$16 - 6 = \underline{\mathbf{10}}$$
