



1. Write the following numbers in words:

a. 11 - _____

b. 24 - _____

c. 39 - _____

d. 46 - _____

e. 53 - _____

2. Write the number that comes after :

a. 11 _____

b. 15 _____

c. 21 _____

d. 32 _____

e. 43 _____

3. Counting backwards:

a. 8, 7, _____, _____, _____, _____



b. 17, 16, _____, _____, _____, _____

c. 26, _____, _____, 23, _____, _____



d. 38, _____, 36, _____, _____, _____

e. 55, _____, _____, 52, _____, _____

4. Add the following objects and write the answer:

a.  +  = _____

b.  +  = _____

c.  +  = _____

d.  +  = _____

e.  +  = _____