



ST. LAWRENCE HIGH SCHOOL

A JESUIT CHRISTIAN MINORITY INSTITUTION

27, BALLYGUNGE CIRCULAR ROAD



Sub: Arithmetic


Worksheet 16

Class: I

Topic: Shape - Square & Mental Maths

Date: 24.04.2020

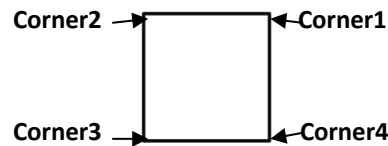
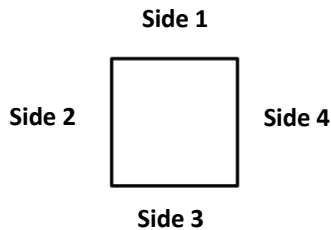
Shape - SQUARE



I am a Square .

I have 4 equal sides made of 4 straight lines .

I have 4 corners.



1. Write the name of the following objects that match the shape of a Square.

- a.  _____
- b.  _____
- c.  _____
- d.  _____
- e.  _____

2. Write the number just before and after:

- a. _____ 15 _____
- b. _____ 99 _____
- c. _____ 70 _____
- d. _____ 151 _____
- e. _____ 245 _____

3. Add one and write the answer:

- a. $16 + 1 =$ _____
- b. $47 + 1 =$ _____
- c. $199 + 1 =$ _____
- d. $206 + 1 =$ _____
- e. $51 + 1 =$ _____

4. Fill in the blanks:

- a. 1 more than 184 is _____
- b. 1 less than 230 is _____
- c. 1 less than 152 is _____
- d. 1 more than 119 is _____
- e. 1 more than 207 is _____