

SUB: ARITHMETIC

CLASS: 1

















DATE: 25.06.2020

1. Write the following numbers in words:





HTO

- a) 628 - Six hundred and twenty eight.
- b) 637 - Six hundred and thirty seven.
- c) 644 - Six hundred and forty four.
- d) 646 - Six hundred and forty six.

2. Tick the coins which will equal the price for each object.

- a)     b)    
- ₹ 5 ₹ 7
- c)     d)    
- ₹ 20 ₹ 10

3. Count the money and write the cost of each item.

- a)    ₹ 15
- b)    ₹ 60
- c)    ₹ 40

4. Fill in the blanks. (4a) is done for you.

- a) Two rupees have 2 1 – rupee coins.
b) Eight rupees have 4 2 – rupee coins.
c) Five rupees have 5 1 – rupee coins.
d) Ten rupees have 2 5 – rupee coins.
e) Six rupees have 3 2 – rupee coins.
-

5. Write the number for each number name.

H T O

- a) Two hundred and fifty four = 2 5 4
b) Five hundred and twenty six = 5 2 6
c) Three hundred and thirteen = 3 1 3
d) Four hundred and fifty = 4 5 0
e) Six hundred and eighteen = 6 1 8

Ms. Lucy K. Gomes