



# ST. LAWRENCE HIGH SCHOOL

A JESUIT CHRISTIAN MINORITY INSTITUTION

27, BALLYGUNGE CIRCULAR ROAD

2ND TERM - 2020

WORKSHEET 10

TOPIC: ADDITION AND SUBTRACTION & WRITE IN WORDS

CLASS: 1

SUB: ARITHMETIC

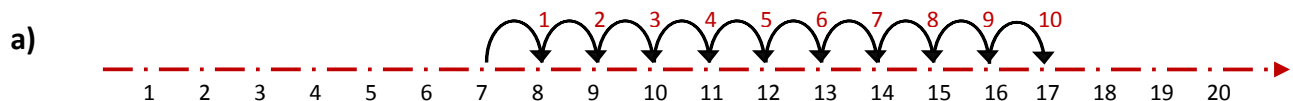
DATE: 14.05.2020

1. Write the following numbers in words:

HTO


- a) 296 - \_\_\_\_\_
- b) 297 - \_\_\_\_\_
- c) 298 - \_\_\_\_\_
- d) 299 - \_\_\_\_\_
- e) 300 - \_\_\_\_\_

2. Count forward to add using the number line. (2a) is done for you:



Start at 7 and count forward till 10 **dots**. The answer is 17.


$$7 + 10 = \underline{17}$$



$$5 + 6 = \underline{\quad}$$



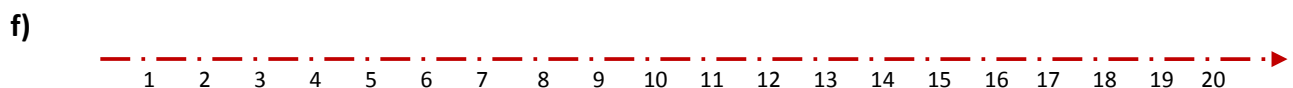
$$8 + 7 = \underline{\quad}$$



$$4 + 9 = \underline{\quad}$$



$$6 + 8 = \underline{\quad}$$



$$9 + 3 = \underline{\quad}$$

3) Cross (x) out and solve. (3a) is done for you:

a)   $12 - 2 = 10$

T	0
1	2
-	<u>2</u>
1	<u>0</u>

---

b)   $14 - 3 = \underline{\quad}$

T	0
1	4
-	<u>3</u>
	<u>    </u>

---

c)   $15 - 1 = \underline{\quad}$

T	0
1	5
-	<u>1</u>
	<u>    </u>

---

d)   $17 - 4 = \underline{\quad}$


T	0
1	7
-	<u>4</u>
	<u>    </u>

---

e)   $16 - 4 = \underline{\quad}$

T	0
1	6
-	<u>4</u>
	<u>    </u>

---

f)   $18 - 3 = \underline{\quad}$

T	0
1	8
-	<u>3</u>
	<u>    </u>

---

4. Write the correct answer:

a) 4 sparrows and 6 parrots. How many birds?  $4 + 6 = \underline{\quad}$

---

b) 6 blue caps and 8 white caps. How many caps?  $6 + 8 = \underline{\quad}$

---

c) 3 tall boys and 9 short boys. How many boys?  $3 + 9 + \underline{\quad}$

---

d) 5 mango trees and 6 apple trees. How many trees?  $5 + 6 = \underline{\quad}$

---

e) 7 rose flowers and 10 sun flowers. How many flowers?  $7 + 10 = \underline{\quad}$

---