
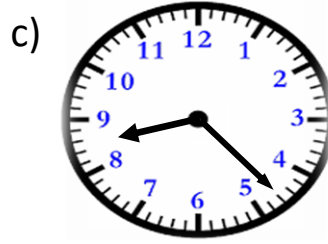


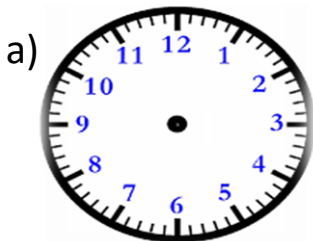


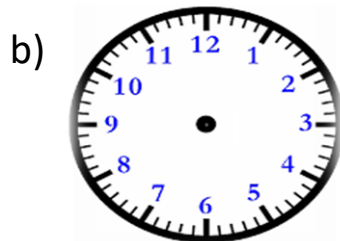
1. Tell the time as shown in these analogue clocks.



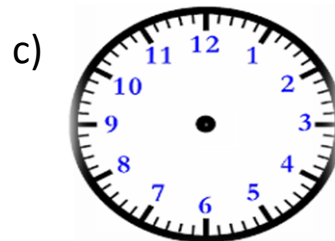
2. Draw hands to show the time mentioned below each analogue clock.



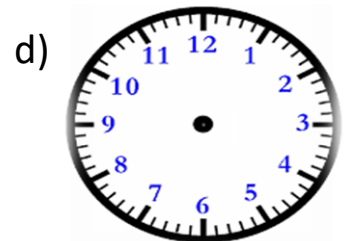
6:38



12:18



9:03



3:48

3. Fill up with a.m. or p.m. to make sentences correct.

- a) Rayan had his dinner at 8:30 _____
 b) Josh went to school at 9:00 _____
 c) Class 4C had morning break at 9:45 _____
 d) I went outside to see the full moon at 11:00 _____

4. What time will it be?

- a) 5 hours after 12 noon?
 b) 45 minutes before 12 midnight?
 c) 4 hours after 6 a.m.?
 d) 6 hours before 11:45 a.m.?

5. Change into 24 hour clock times.

- a) 7 a.m. = _____
 b) 10:30 p.m. = _____
 c) 12 noon = _____
 d) 4:15 p.m. = _____