



# ST. LAWRENCE HIGH SCHOOL

A JESUIT CHRISTIAN MINORITY INSTITUTION

27, BALLYGUNGE CIRCULAR ROAD



Sub: Arithmetic



Answer Worksheet 15



Class: I



Topic: Subtraction & Mental Maths



Date: 23.04.2020



1. Tick (✓) the box which has less objects. How many less? (1. a) is done for you.



a.    
 2  3   
 $\underline{3} - \underline{2} = \underline{1}$  less

b.    
 1  4   
 $\underline{4} - \underline{1} = \underline{3}$  less

c.    
 3  5   
 $\underline{5} - \underline{3} = \underline{2}$  less

d.    
 5  6   
 $\underline{6} - \underline{5} = \underline{1}$  less

e.    
 4  2   
 $\underline{4} - \underline{2} = \underline{2}$  less

f.    
 7  3   
 $\underline{7} - \underline{3} = \underline{4}$  less

2. Write the number just before or after:

a. 34 35

b. 99 100

c. 241 242

d. 185 186

e. 249 250

3. Write the number in between:

a. 156 157 158

b. 208 209 210

c. 77 78 79

d. 239 240 241

e. 126 127 128

4. Fill in the blanks:

a. 1 less than 8 is 7

b. 1 less than 60 is 59

c. 1 less than 26 is 25

d. 1 less than 41 is 40

e. 1 less than 2 is 1