

Sub: Arithmetic

Class: 1

Date: 29.06.2020

1. Write the following numbers in words:

HTO

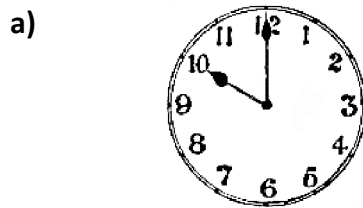
a) 518 - Five hundred and eighteen.

b) 601 - Six hundred and one.

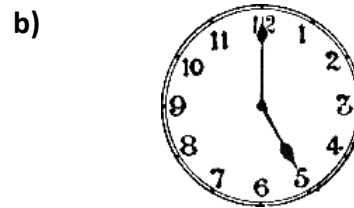
2. Write the time as directed. (2a) is done for you.

a) 9 o'clock - 9.00      b) 4 o'clock - 4.00      c) 6 o'clock - 6.00

3. Draw the hour hand on each clock to show the time.




10 o'clock




5 o'clock

4. Tick (✓) the coins which will equal the price for each object.



5. Count the coins and notes and write the answer.



6. Write the decimal (.) form. (6a) is done for you.

a) ₹ 2 and 68 p. = ₹ 2.68

b) ₹ 7 and 50 p. = ₹ 7.50

c) ₹ 10 and 40 p. = ₹ 10.40

d) ₹ 4 and 77 p. = ₹ 4.77

e) ₹ 15 and 86 p. = ₹ 15.86

f) ₹ 6 and 47 p. = ₹ 6.47

g) ₹ 20 and 95 p. = ₹ 20.95

---

7. Write the number for each number name.

H T O

a) Two hundred and seventy seven = 2 7 7

b) Six hundred and twenty eight = 6 2 8

c) Five hundred and fifty six = 5 5 6

d) Four hundred and ninety one = 4 9 1

Ms. Lucy K. Gomes