



ST. LAWRENCE HIGH SCHOOL

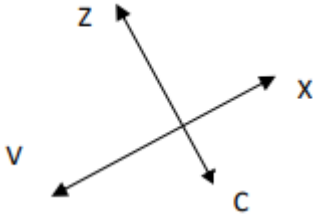


A JESUIT CHRISTIAN MINORITY INSTITUTION

- Subject- Mathematics Answers of Worksheet- 7 Class – 5
- Date-18.04.2020 1st Term

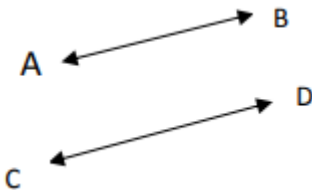
Topic- Types of lines

Q 1 - Use parallel or perpendicular to describe the following lines.



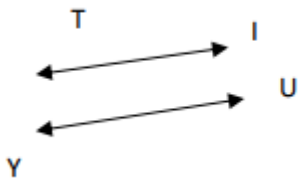
A - perpendicular lines

Q 2 - Use parallel or perpendicular to describe the following lines.



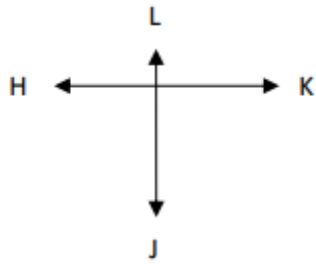
D - parallel lines

Q 3 - Use parallel or perpendicular to describe the following lines.



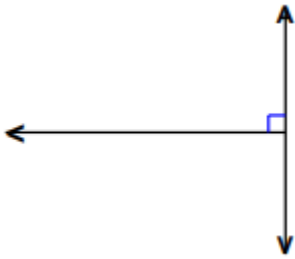
B - parallel lines

Q 4 - Use parallel or perpendicular to describe the following lines.



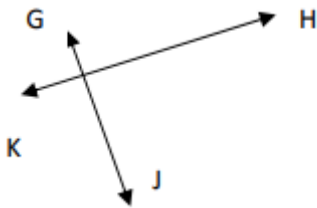
[C - perpendicular lines](#)

Q 5 - Use parallel or perpendicular to describe the following lines.



[D - perpendicular lines](#)

Q 6 - Use parallel or perpendicular to describe the following lines.



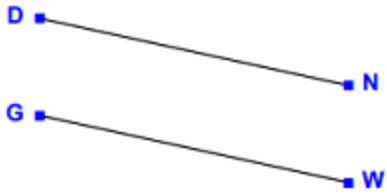
[C - perpendicular lines](#)

Q 7 - Use parallel or perpendicular to describe the following lines.



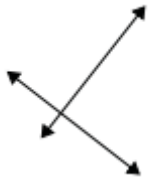
[B - parallel lines](#)

Q 8 - Use parallel or perpendicular to describe the following lines.



[A - parallel lines](#)

Q 9 - Use parallel or perpendicular to describe the following lines.



[C - perpendicular lines](#)

Q 10 - Use parallel or perpendicular to describe the following lines.



[D - parallel lines](#)

11. True or False: Two parallel lines intersect.

False

12. A triangle is a closed planar shape with

A. 3 sides

13. A closed planar shape with 5 sides is called a

i. pentagon

14. A closed planar shape with 4 sides is called a

i. quadrilateral

15. A line segment is defined by

i. 1 point

Teacher- Piyali Halder