



# ST. LAWRENCE HIGH SCHOOL




A JESUIT CHRISTIAN MINORITY INSTITUTION


27, BALLYGUNGE CIRCULAR ROAD, KOLKATA- 700019

CLASS – IV TERM - SECOND SUBJECT- ARITHMETIC ANSWER WORKSHEET – 26 TOPIC – TIME DATE – 22.06.2020

## 1. Tell the time as shown in these analogue clocks.



6:57



10:32




8:23

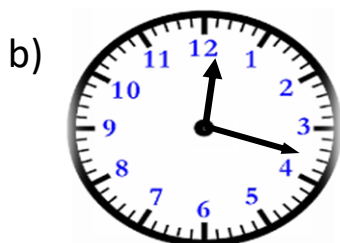


2:03

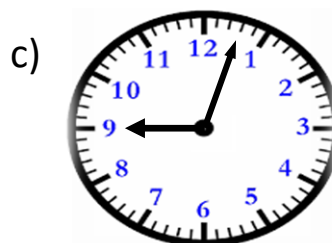
## 2. Draw hands to show the time mentioned below each analogue clock.




6:38



12:18



9:03



3:48

## 3. Fill up with a.m. or p.m. to make sentences correct.

- Rayan had his dinner at 8:30 p.m.
- Josh went to school at 9:00 a.m.
- Class 4C had morning break at 9:45 a.m.
- I went outside to see the full moon at 11:00 p.m.

## 4. What time will it be?

- 5 hours after 12 noon?  
**Ans. 5 p.m.**
- 45 minutes before 12 midnight?  
**Ans. 11:15 p.m.**
- 4 hours after 6 a.m.?  
**Ans. 10:00 a.m.**
- 6 hours before 11:45 a.m.?  
**Ans. 5:45 a.m.**

## 5. Change into 24 hour clock times.

- 7 a.m. = 0700 hours
- 10:30 p.m. = 2230 hours
- 12 noon = 1200 hours
- 4:15 p.m. = 1615 hours